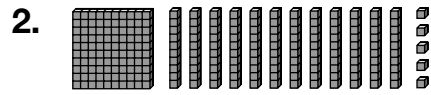
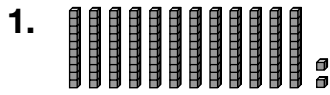


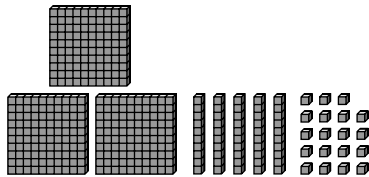
Place-Value Patterns

Write each number in standard form.



3. **Number Sense** The largest giant jellyfish ever found was 7 ft wide and had tentacles that were more than 120 ft long. Draw place-value blocks to show 120 using only tens.

4. **Representations** Draw the place-value blocks needed to finish making 469.



Test Prep

5. Which number has the same value as 4 hundreds, 7 tens, and 22 ones?
- A. 492 B. 472 C. 452 D. 427

6. **Writing in Math** Explain how you can use place-value blocks to show 100 in different ways.
