



Name _____

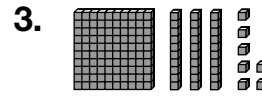
Numbers in the Hundreds

P 1-2

Write each number in standard form.







4. $700 + 30 + 6$ _____

5. two hundreds, five tens, nine ones _____

Write the word name for each number.

6. 212 _____

7. $600 + 3$ _____

Algebra Find each missing number.

8. $200 + 10 + \underline{\hspace{1cm}} = 212$

9. $\underline{\hspace{1cm}} + 70 + 1 = 971$

Test Prep

10. Which is the missing number? $100 + \underline{\hspace{1cm}} + 9 = 139$

A. 3

B. 13

C. 30

D. 33

11. **Writing in Math** Explain how the digit 7 can have different values.
